
GEOGRAPHY

9696/04

Paper 4 Advanced Human Geography Options

For Examination from 2018

SPECIMEN INSERT

1 hour 30 minutes

READ THESE INSTRUCTIONS FIRST

This Insert contains all the resources referred to in the questions.

This document consists of **6** printed pages and **2** blank pages.

Fig. 1 for Question 1

Models of two agricultural systems

Extensive subsistence farming

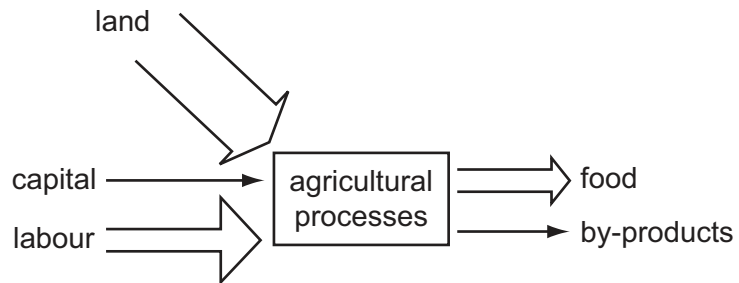


Fig. 1A

Intensive commercial farming

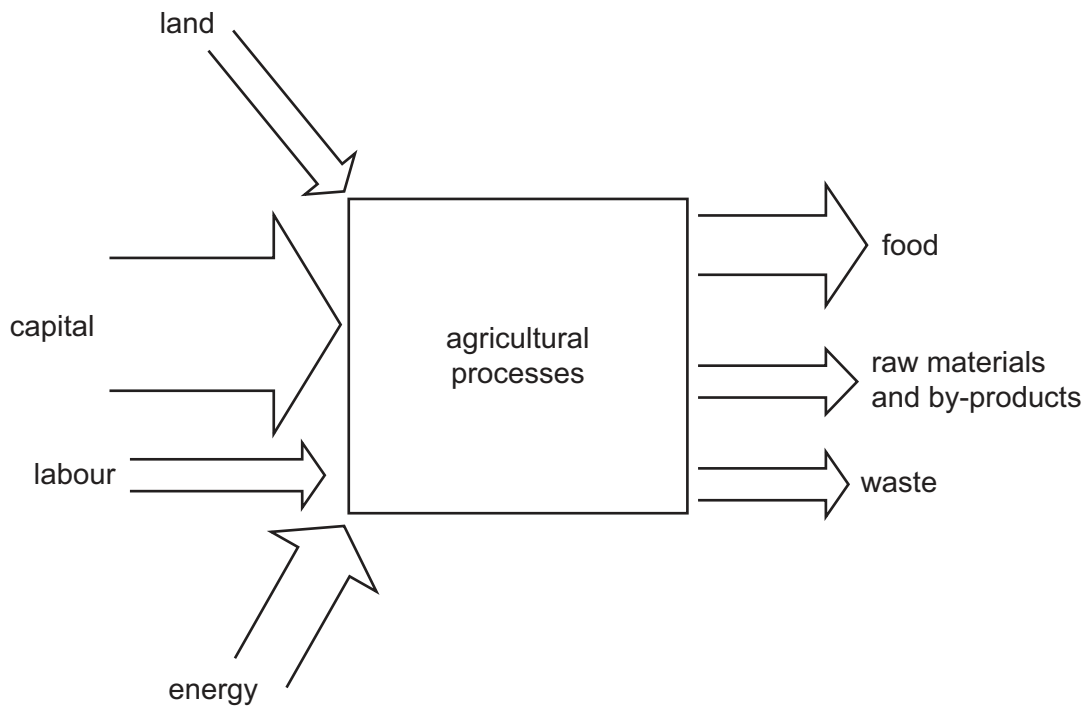


Fig. 1B

Photograph A for Question 4

Construction of an oil pipeline through the Amazon rainforest, Ecuador, an MIC in South America, 2003



Guards protect the work because of threats from environmentalists and indigenous people.

Fig. 2 for Question 7

Government aid from HICs, 2000–09

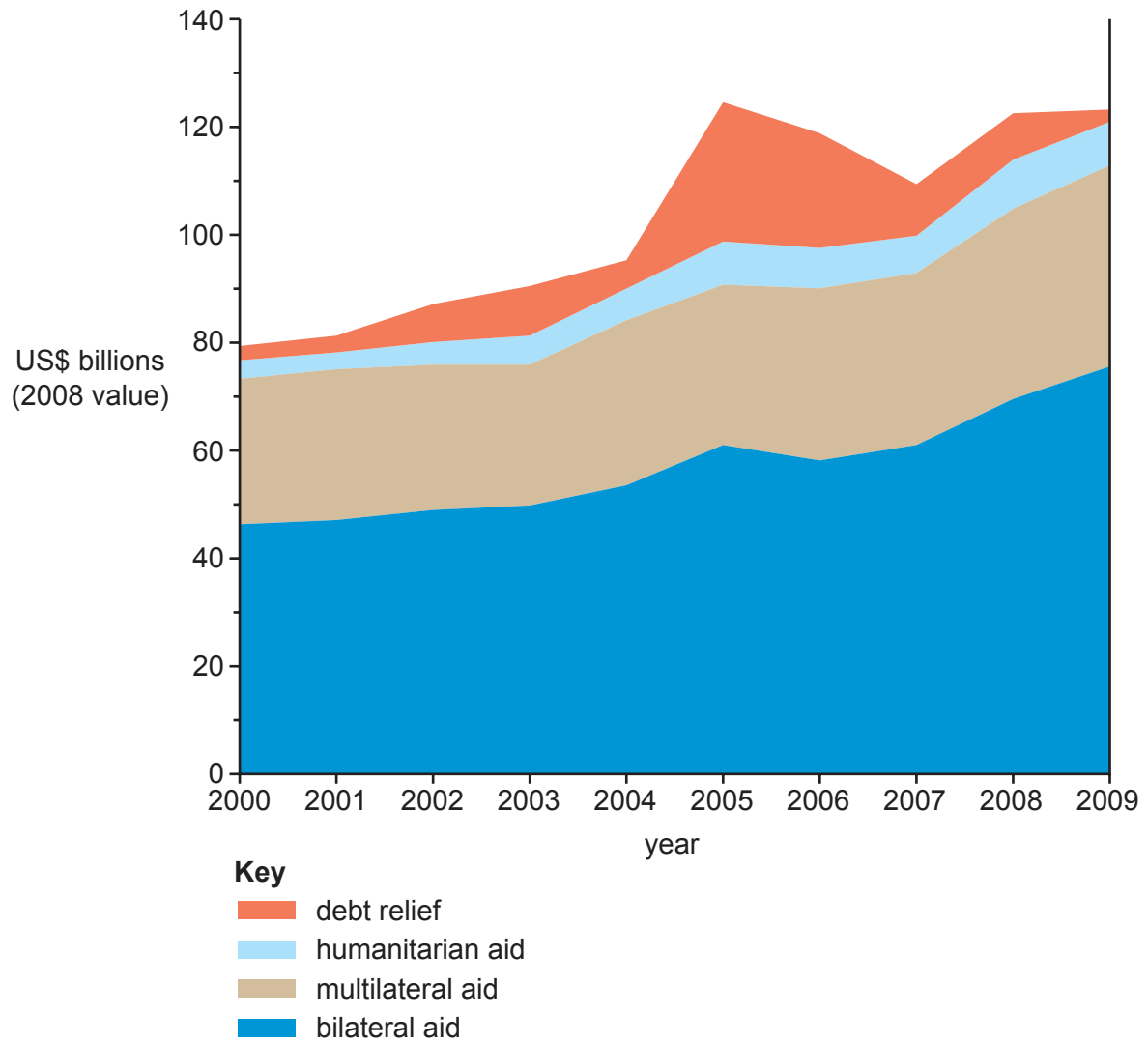
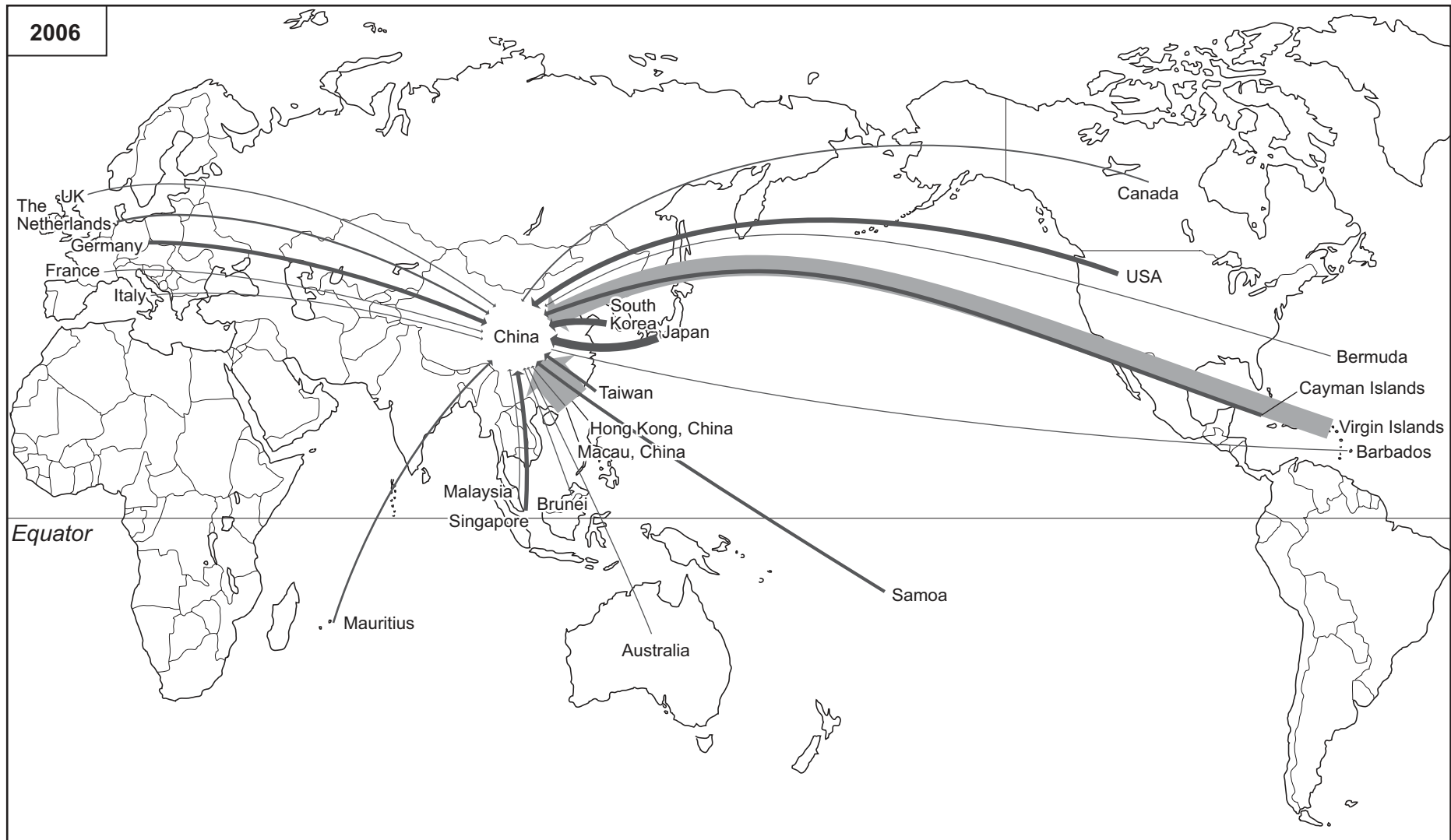


Fig. 3 for Question 10

Fig. 3A Foreign direct investment (FDI) into China, 1992

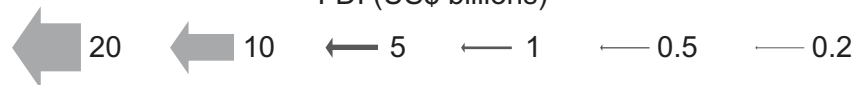


Fig. 3B Foreign direct investment (FDI) into China, 2006



Key for 1992 and 2006

FDI (US\$ billions)



BLANK PAGE

Copyright Acknowledgements:

Question 4 © <http://www.grassroots.de/ecas/html>; 24 August 2011.

Question 7 © United Nations; http://www.un.org/millenniumgoals/pdf/MDG_Report2010_En_r15_-low_res_20100615; August 2011.

Permission to reproduce items where third-party owned material protected by copyright is included has been sought and cleared where possible. Every reasonable effort has been made by the publisher (UCLES) to trace copyright holders, but if any items requiring clearance have unwittingly been included, the publisher will be pleased to make amends at the earliest possible opportunity.

Cambridge International Examinations is part of the Cambridge Assessment Group. Cambridge Assessment is the brand name of University of Cambridge Local Examinations Syndicate (UCLES), which is itself a department of the University of Cambridge.